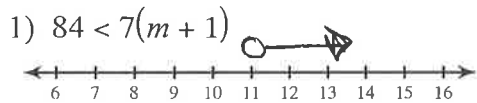
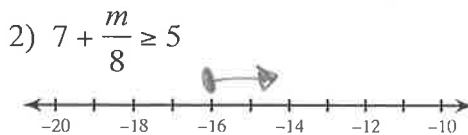


Review for PC #2 - Unit 1

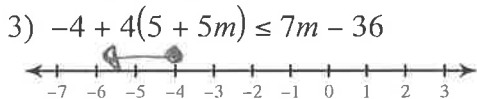
Solve each inequality and graph its solution.



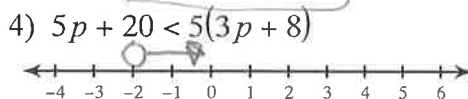
$$\begin{aligned} 84 &< 7m + 7 \\ -7 &\quad -7 \\ \hline 77 &< 7m \\ \frac{77}{7} &\quad \frac{7m}{7} \\ 11 &< m \end{aligned} \quad \boxed{m > 11}$$



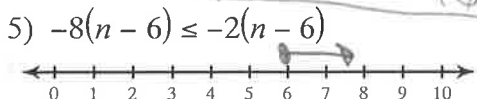
$$\begin{aligned} 7 + \frac{m}{8} &\geq 5 \\ -7 &\quad -7 \\ \hline 8 \cdot \frac{m}{8} &\geq -2 \cdot 8 \\ m &\geq -16 \end{aligned} \quad \boxed{m \geq -16}$$



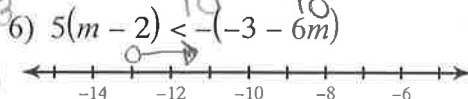
$$\begin{aligned} -4 + 20 + 20m &\leq 7m - 36 \\ 16 + 20m &\leq 7m - 36 \\ -7m &\quad -7m \\ \hline 16 + 13m &\leq -36 \\ -16 &\quad -16 \\ \hline 13m &\leq -52 \\ \frac{13m}{13} &\quad \frac{-52}{13} \\ m &\leq -4 \end{aligned} \quad \boxed{m \leq -4}$$



$$\begin{aligned} 5p + 20 &< 15p + 40 \\ -5p &\quad -5p \\ \hline 20 &< 10p + 40 \\ -40 &\quad -40 \\ \hline -20 &< 10p \\ \frac{-20}{10} &\quad \frac{10p}{10} \\ -2 &< p \end{aligned} \quad \boxed{p > -2}$$



$$\begin{aligned} -8n + 48 &\leq -2n + 12 \\ +8n &\quad +8n \\ \hline 48 &\leq 6n + 12 \\ -12 &\quad -12 \\ \hline 36 &\leq 6n \\ \frac{36}{6} &\quad \frac{6n}{6} \\ 6 &\leq n \end{aligned} \quad \boxed{n \geq 6}$$



$$\begin{aligned} 5m - 10 &< 3 + 6m \\ -5m &\quad -5m \\ \hline -10 &< 3 + 1m \\ -3 &\quad -3 \\ \hline -13 &< m \end{aligned} \quad \boxed{m > -13}$$

Translate the words into an inequality and graph. Then find all of the choices that would have this graph as a solution.

7) A number is at least -3.

$$\boxed{x \geq -3}$$

- A) $x + 23 \geq -4(x - 2)$
- B) $2x + 7 - x \geq 2x + 4$
- C) $-6x \leq 18$
- D) $2(x + 1) \leq 3x + 5$

$$\begin{aligned} d) \quad 2x + 2 &\leq 3x + 5 \\ -2x &\quad -2x \\ \hline 2 &\leq x + 5 \\ -5 &\quad -5 \\ \hline -3 &\leq x \\ x &\geq -3 \end{aligned}$$

a) $x + 23 \geq -4x + 8$

$$\begin{aligned} +4x &\quad +4x \\ \hline 5x + 23 &\geq 8 \\ -23 &\quad -23 \\ \hline 5x &\geq -15 \\ x &\geq -3 \end{aligned}$$

b) $2x + 7 - x \geq 2x + 4$

$$\begin{aligned} x + 7 &\geq 2x + 4 \\ -x &\quad -x \\ \hline 7 &\geq x + 4 \\ -4 &\quad -4 \\ \hline 3 &\geq x \\ x &\leq 3 \end{aligned}$$

c) $-6x \leq 18$

$$\begin{aligned} -6 &\quad -6 \\ \hline x &\geq -3 \end{aligned}$$

Solve each compound inequality and graph its solution.

8) $24 \leq 3x < 27$



$$\frac{24}{3} \leq \frac{3x}{3} \quad \frac{3x}{3} < \frac{27}{3}$$

$$8 \leq x < 9$$

9) $2x > 0$ or $x - 3 < -5$

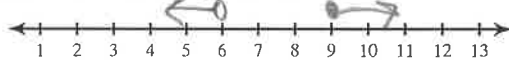


$$\frac{2x}{2} > \frac{0}{2} \quad x - 3 < -5$$

$$\phantom{\frac{2x}{2}} \phantom{\frac{0}{2}} $$

$$x > 0 \text{ or } x < -2$$

10) $-3 - 6n > -39$ or $6n - 10 \geq 44$

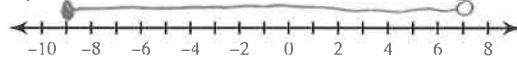


$$\frac{-3 - 6n}{+3} > \frac{-39}{+3} \quad \frac{6n - 10}{+10} \geq \frac{44}{+10}$$

$$\frac{-6n}{-6} > \frac{-36}{-6} \quad \frac{6n}{6} \geq \frac{54}{6}$$

$$n < 6 \text{ or } n \geq 9$$

11) $-17 \leq 2n + 1 \leq 15$



$$\frac{-17 \leq 2n + 1}{-1} \leq \frac{2n + 1 \leq 15}{-1}$$

$$\frac{-18 \leq 2n}{2} \leq \frac{2n \leq 14}{2}$$

$$-9 \leq n \leq 7$$

12) The French club is sponsoring a bake sale. If their goal is to raise at least \$140, how many pastries must they sell at \$3.50 each in order to meet that goal? Write and solve the inequality.

$$\frac{3.5x}{3.5} \geq \frac{140}{3.5}$$

$$x \geq 40 \text{ pastries}$$

13) Four times the quantity of the sum of a number and 15 is at least 120 and no more than 165. Write and solve a compound inequality to find all possible values of x.

$$120 \leq 4(x + 15) \leq 165$$

$$15 \leq x \leq \frac{165}{4}$$

$$\frac{120 \leq 4x + 60}{-60} \leq \frac{4x + 60 \leq 165}{-60}$$

$$\frac{60 \leq 4x}{4} \leq \frac{4x}{4}$$

$$15 \leq x$$

$$\frac{4x + 60 \leq 165}{-60} \leq \frac{165}{-60}$$

$$4x \leq 165$$

$$x \leq 41.25$$

$$x \leq \frac{165}{4}$$

Write an algebraic proof for each equation.

14) $8(-2a - 8) = -160$

$$\frac{-16a - 64 = -160}{+64} \quad \frac{-16a - 64 = -160}{+64}$$

$$\frac{-16a}{-16} = \frac{-96}{-16}$$

$$a = 6$$

given
Dist. POE
Add POE
Simplify
Div. POE
Simplify

15) $-90 = 2(7k + 4)$

$$\frac{-90 = 14k + 8}{-8} \quad \frac{-90 = 14k + 8}{-8}$$

$$\frac{-98}{14} = \frac{14k}{14}$$

$$-7 = k$$

given
Dist. POE
Subt. POE
Simplify
Divide POE
Simplify

16) $-190 = -5(7x - 4)$

$$\frac{-190 = -35x + 20}{-20} \quad \frac{-190 = -35x + 20}{-20}$$

$$\frac{-210}{-35} = \frac{-35x}{-35}$$

$$6 = x$$

given
Dist. POE
Subt. POE
Simplify
Div. POE
Simplify

17) $3(7n - 4) = -117$

$$\frac{21n - 12 = -117}{+12} \quad \frac{21n - 12 = -117}{+12}$$

$$\frac{21n}{21} = \frac{-105}{21}$$

$$n = -5$$

given
Dist. POE
Add POE
Simplify
Div. POE
Simplify