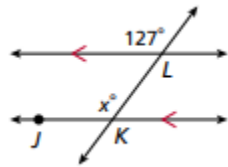


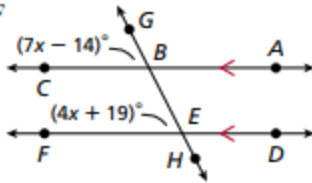
Geometry - WS 3.2 Parallel Lines and Transversals

Find each angle measure.

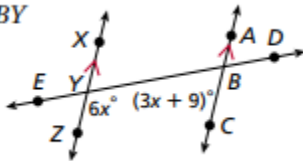
1. $m\angle JKL$



2. $m\angle BEF$



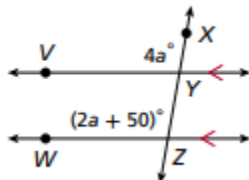
3. $m\angle CBY$



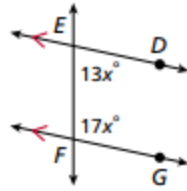
4. The railing of the wheelchair ramp is parallel to the ramp. Find the value of x and y .



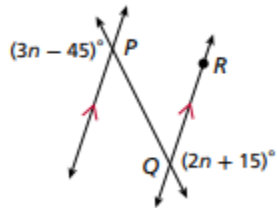
5. $m\angle VYX$



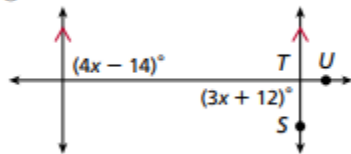
6. $m\angle EFG$



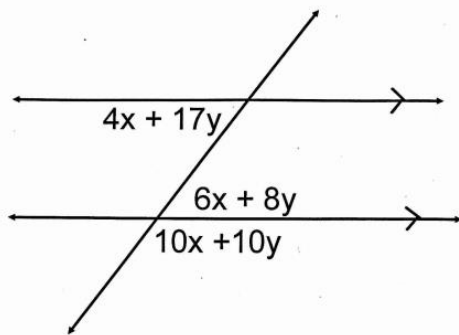
7. $m\angle PQR$



8. $m\angle STU$



9. Find the value of x and y .



10.

